

Write your name here

Surname

Other names

In the style of:
Pearson Edexcel
GCSE

Centre Number

--	--	--	--	--

Candidate Number

--	--	--	--	--

Mathematics

Frequency

Foundation Tier

GCSE style questions arranged by topic

Paper Reference

1MA0/2F

You must have: Ruler graduated in centimetres and millimetres, protractor, pair of compasses, pen, HB pencil, eraser, calculator.

Total Marks

--

Instructions

- Use **black** ink or ball-point pen.
- **Fill in the boxes** at the top of this page with your name, centre number and candidate number.
- Answer **all** questions.
- Answer the questions in the spaces provided – *there may be more space than you need.*
- **Calculators may be used.**
- If your calculator does not have a π button, take the value of π to be 3.142 unless the question instructs otherwise.
- Diagrams are **NOT** accurately drawn, unless otherwise indicated.
- You must **show all your working out.**



Information

- The total mark for this paper is 80
- The marks for **each** question are shown in brackets – *use this as a guide as to how much time to spend on each question.*

Advice

- Read each question carefully before you start to answer it.
- Keep an eye on the time.
- Try to answer every question.
- Check your answers if you have time at the end.

Turn over ►



1 (a) Basil records the types of fish that he caught during his holiday in The Bahamas.

(i) Complete the table.

Type of fish	Tally	Frequency
Mutton Fish	IIII	
Grouper	III	
Jack	HHH HHH II	
Schoolmaster	HH IIII	
	Total	

(3)

(ii) What fraction of the fish are Mutton Fish?
Give your answer in its simplest form.

.....

(2)



(b) This table shows the types of fish that Peter caught during the holiday.

Type of fish	Mutton Fish	Grouper	Jack	Schoolmaster
Frequency	4	6	5	3

He has finished the first row of a pictogram to show the results.

Complete the key and pictogram.

Key:  represents fish

Mutton Fish	 
Grouper	
Jack	
Schoolmaster	

(4)



- (c) 500 000 people record the types of birds in their gardens. In total, they record eight million birds.
On average, how many birds does each person record?

.....
(3)

- (d) Here is a list of the birds at a bird table.

robin robin sparrow blackbird starling
blackbird starling blackbird robin blackbird

One bird flies away. Another bird arrives at the bird table.
The new mode is robin.

What type of bird flies away and what type of bird arrives? Complete the table.

Type of bird	
Flies away	
Arrives	

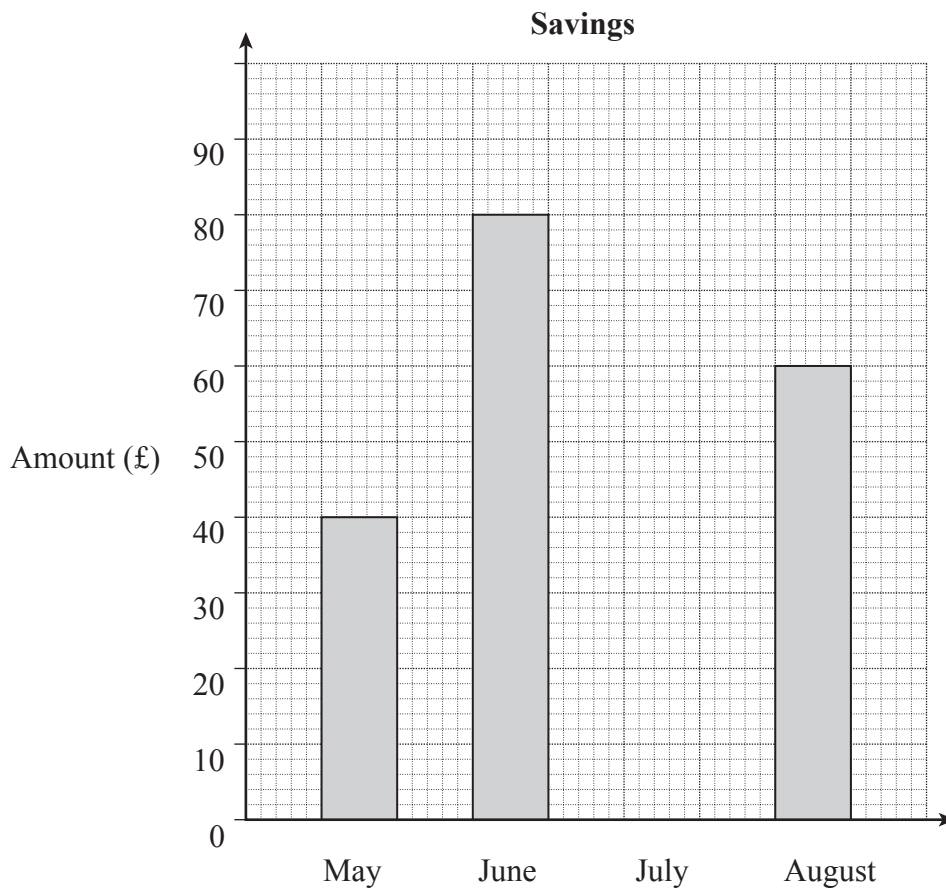
(2)

(Total for Question 1 is 14 marks)



2 (a)

The bar chart shows the amounts Isaac saves in May, June and August 2010.



(i) How much does he save in May 2010?

£

(1)

(ii) From May to August he saves £250 in total.

Complete the bar chart by drawing the bar for July.

(3)



(b) The pictogram shows the amounts Isaac saves in the next four months.

Key:

--	--

 represents £20

September	<table border="1" style="display: inline-table;"><tr><td style="width: 20px; height: 20px;"></td><td style="width: 20px; height: 20px;"></td></tr></table>			<table border="1" style="display: inline-table;"><tr><td style="width: 20px; height: 20px;"></td><td style="width: 20px; height: 20px;"></td></tr></table>			<table border="1" style="display: inline-table;"><tr><td style="width: 20px; height: 20px;"></td><td style="width: 20px; height: 20px;"></td></tr></table>			<table border="1" style="display: inline-table;"><tr><td style="width: 20px; height: 20px;"></td><td style="width: 20px; height: 20px;"></td></tr></table>		
October	<table border="1" style="display: inline-table;"><tr><td style="width: 20px; height: 20px;"></td><td style="width: 20px; height: 20px;"></td></tr></table>			<table border="1" style="display: inline-table;"><tr><td style="width: 20px; height: 20px;"></td><td style="width: 20px; height: 20px;"></td></tr></table>			<table border="1" style="display: inline-table;"><tr><td style="width: 20px; height: 20px;"></td></tr></table>					
November	<table border="1" style="display: inline-table;"><tr><td style="width: 20px; height: 20px;"></td><td style="width: 20px; height: 20px;"></td></tr></table>			<table border="1" style="display: inline-table;"><tr><td style="width: 20px; height: 20px;"></td></tr></table>								
December	<table border="1" style="display: inline-table;"><tr><td style="width: 20px; height: 20px;"></td><td style="width: 20px; height: 20px;"></td></tr></table>			<table border="1" style="display: inline-table;"><tr><td style="width: 20px; height: 20px;"></td><td style="width: 20px; height: 20px;"></td></tr></table>			<table border="1" style="display: inline-table;"><tr><td style="width: 20px; height: 20px;"></td><td style="width: 20px; height: 20px;"></td></tr></table>			<table border="1" style="display: inline-table;"><tr><td style="width: 20px; height: 20px;"></td></tr></table>		

Work out the range of the amount he saves in these four months. You **must** show your working.

£
(2)

(c) (i) For the next 4 months he saves £50 each month.

How much has he saved in total?

£
(3)

(ii) Isaac spends 50% of these total savings to pay for a holiday.

How much does he pay for the holiday?

.....
.....

£
(2)



3

Is money discrete or continuous? Tick a box.

Discrete

Continuous

Give a reason for your answer.

(1)

Peter sells revision guides on a website. The sales in May are shown.

Sales (£)	Frequency
8	10
10	18
12	7
15	4
20	1

(a) Calculate his mean price.

£

(3)

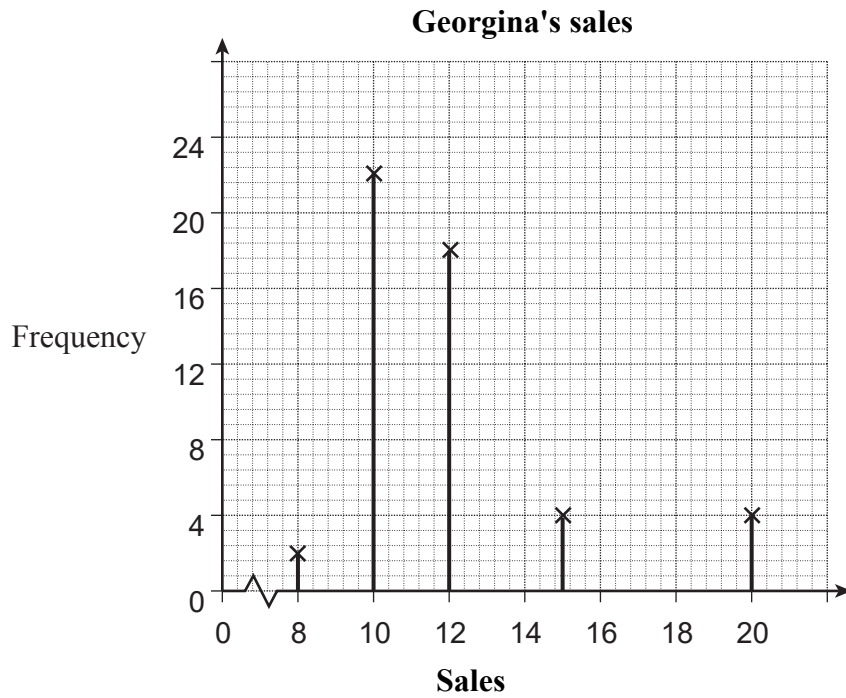
(b) Peter says that his modal price and his median price are both £10. Is he correct?

Give reasons and working to show how you decide.

(2)



(c) Georgina also sells revision guides on a website



Give **one** similarity and **one** difference in the sales of Peter and Georgina.

Similarity

.....

Difference

.....

(2)

(Total for Question 3 is 10 marks)



4 Kelsi rolled a dice 10 times.

Here are her scores.

1 5 6 4 4 2 2 3 4 3

(a) Find the mode.

.....
(1)

(b) Work out the mean.

.....
(2)

(c) Work out the range.

.....
(2)

(Total for Question 4 is 5 marks)



5 Here is a list of the fruit 25 people liked best.


cherries strawberries cherries raspberries raspberries strawberries plums
rasberries cherries strawberries plums raspberries raspberries
rasberries cherries cherries plums strawberries strawberries
plums raspberries strawberries strawberries plums strawberries

(a) Complete the table for the information in the list.

Fruit	Tally	Frequency
cherries		
plums		
rasberries		
strawberries		

(2)

(b) Draw a suitable diagram to show this information in the table.
Use the grid below.



(3)

(Total for Question 5 is 5 marks)



6

	Male	Female
First year	397	608
Second year	250	210

The table gives information about the numbers of students in the two years of a college course.

Hanna wants to interview some of these students.

She takes a random sample of 50 students stratified by year and by gender.

Work out the number of students in the sample who are male and in the first year.

.....

(Total for Question 6 is 3 marks)



7 Tara carried out a survey of the number of school dinners 34 students had in one week.

The table shows this information.

Number of school dinners	Frequency	
0	0	
1	8	
2	12	
3	7	
4	5	
5	2	

Calculate the mean.

.....

(Total for Question 7 is 3 marks)



8 Sophie asked 32 women about the number of children they each had.

The table shows information about her results.

Number of children	Frequency	
0	9	
1	6	
2	7	
3	8	
4	2	
more than 4	0	

(a) Find the mode.

.....
(1)

(b) Calculate the mean.

.....
(3)

(Total for Question 8 is 4 marks)



9 The table shows some information about the ages, in years, of 60 people.

Age (in years)	Frequency
0 to 9	6
10 to 19	13
20 to 29	12
30 to 39	9
40 to 49	7
50 to 59	4
60 to 69	9

(a) Write down the modal class.

.....
(1)

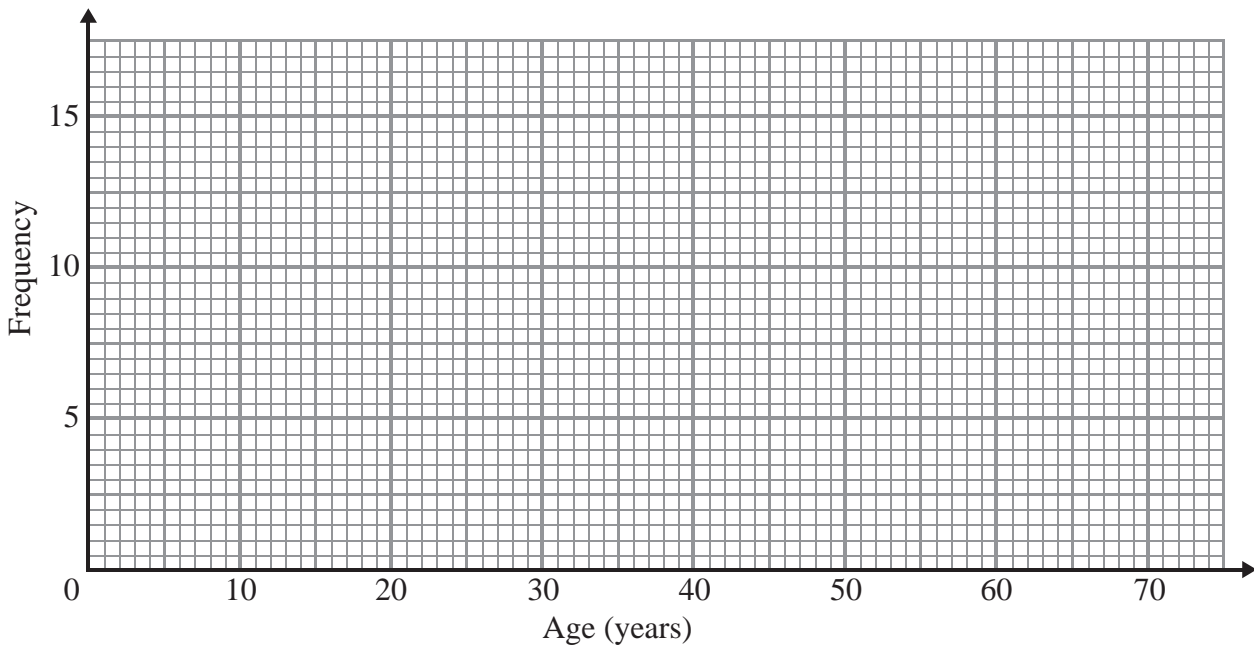
David says

‘The median lies in the class 30 to 39’

David is wrong.

(b) Explain why.

.....
.....
(1)



(c) On the grid, draw a frequency polygon for the information in the table.

(2)



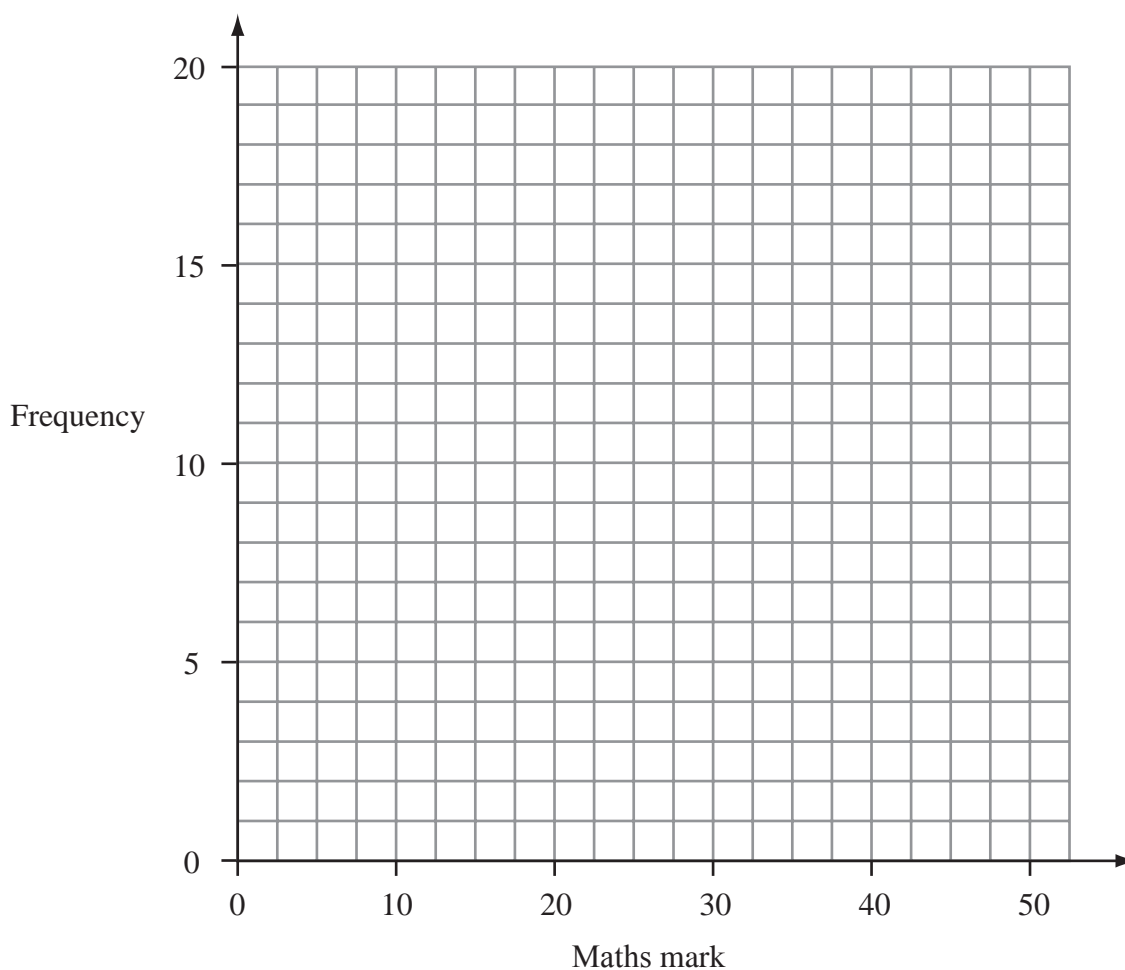
10 60 students take a maths test.

The test is marked out of 50.

This table shows information about the students' marks.

Maths mark	0–10	11–20	21–30	31–40	41–50
Frequency	5	13	17	19	6

On the grid, draw a frequency polygon to show this information.



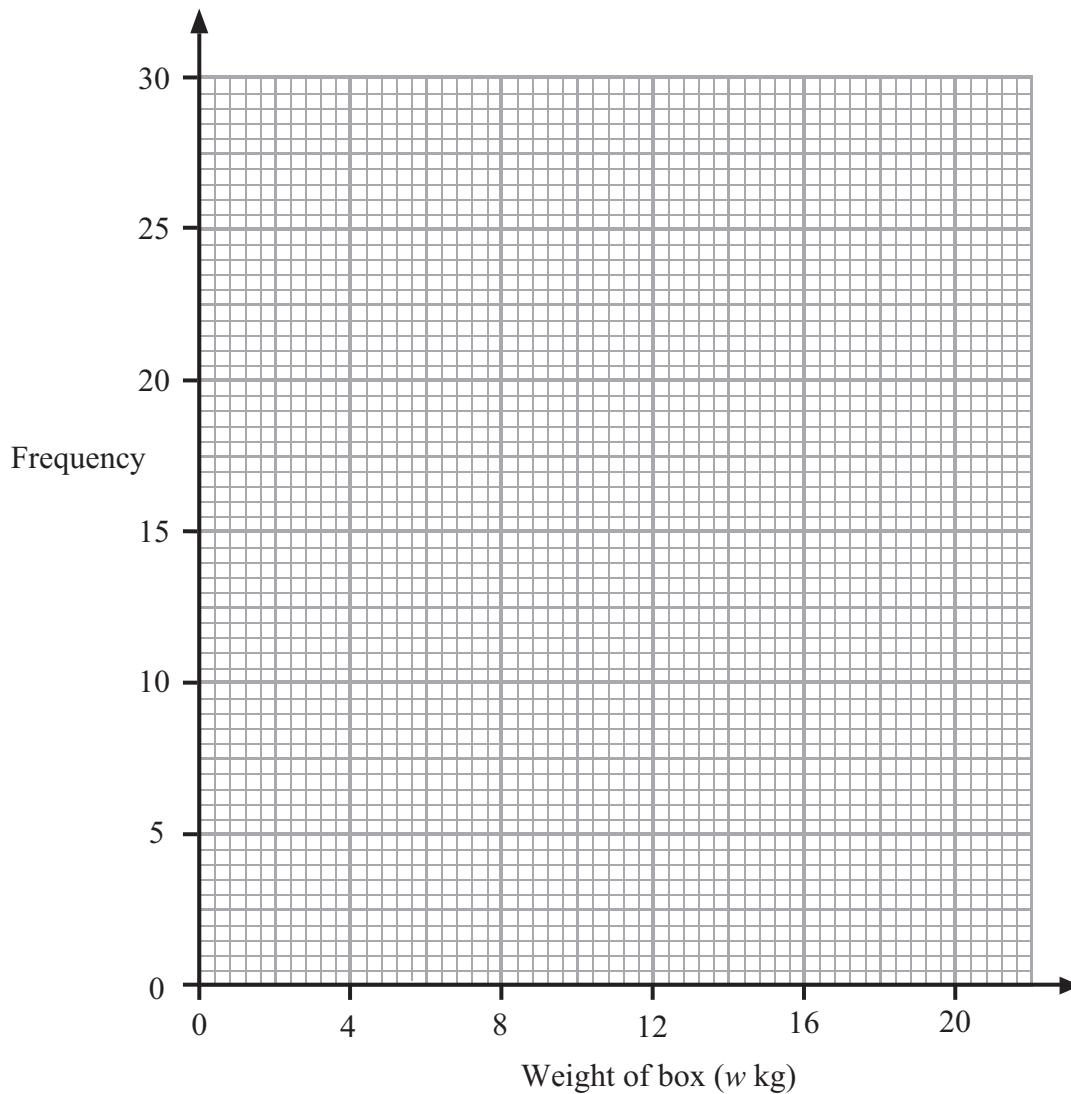
(Total for Question 10 is 2 marks)



11 The table shows some information about the weights, in kg, of 100 boxes.

Weight of box (w kg)	Frequency
$0 < w \leq 4$	11
$4 < w \leq 8$	16
$8 < w \leq 12$	29
$12 < w \leq 16$	26
$16 < w \leq 20$	20

Draw a frequency polygon to show this information.



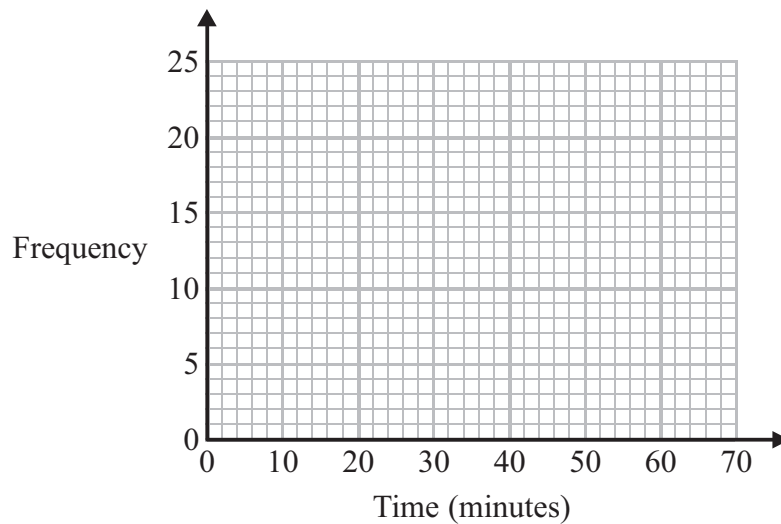
(Total for Question 11 is 2 marks)



12 The frequency table gives information about the times it took some children to get to school one day.

Time (t minutes)	Frequency
$0 < t \leq 10$	4
$10 < t \leq 20$	8
$20 < t \leq 30$	14
$30 < t \leq 40$	16
$40 < t \leq 50$	6
$50 < t \leq 60$	2

(a) Draw a frequency polygon for this information.



(2)

(b) Write down the modal class interval.

.....
(1)

One of the children is chosen at random.

(c) Work out the probability that this child took more than 40 minutes to get to school.

.....
(2)

(Total for Question 12 is 5 marks)

